











Write down the number of columns and rows and then write a multiplication question accordingly - page 7

<p>Columns: <u>9</u></p> <p>Rows: <u>6</u> $6 \times 9 = 54$</p> 	<p>Columns: _____</p> <p>Rows: _____ \times _____ = _____</p> 	<p>Columns: _____</p> <p>Rows: _____ \times _____ = _____</p> 
<p>Columns: _____</p> <p>Rows: _____ \times _____ = _____</p> 	<p>Columns: _____</p> <p>Rows: _____ \times _____ = _____</p> 	<p>Columns: _____</p> <p>Rows: _____ \times _____ = _____</p> 
<p>Columns: _____</p> <p>Rows: _____ \times _____ = _____</p> 	<p>Columns: _____</p> <p>Rows: _____ \times _____ = _____</p> 	<p>Columns: _____</p> <p>Rows: _____ \times _____ = _____</p> 