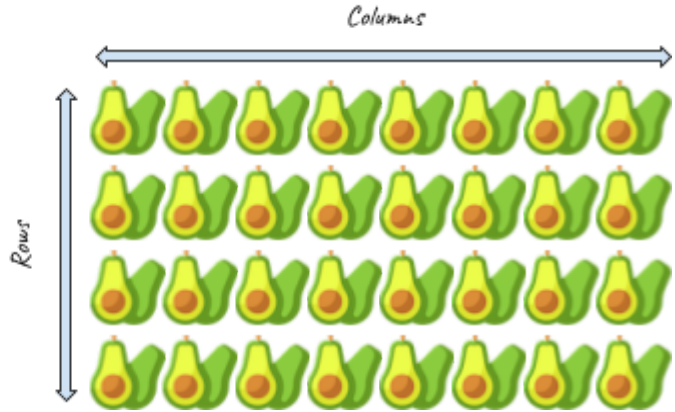




WRITE A MULTIPLICATION SENTENCE ACCORDING TO THE IMAGE, EXAMPLE:

Rows      Columns      Result

$$\boxed{4} \times \boxed{8} = \boxed{32}$$




$\boxed{\phantom{0}} \times \boxed{\phantom{0}} = \boxed{\phantom{0}}$

$\boxed{\phantom{0}} \times \boxed{\phantom{0}} = \boxed{\phantom{0}}$




×  =



A dashed-line box containing a multiplication problem template on the left and a visual representation of 21 broccoli icons arranged in 3 rows of 7 on the right.

×  =



A dashed-line box containing a multiplication problem template on the left and a visual representation of 24 broccoli icons arranged in 6 rows of 4 on the right.



$$\square \times \square = \square$$



$$\square \times \square = \square$$

