

Practice up to 20 addition problems

Count the aliens in each question, then write an appropriate addition problem









 $\square + \square = \square$


 $\square + \square = \square$


 $\square + \square = \square$


 $\square + \square = \square$




 $\square + \square = \square$






 $\square + \square = \square$