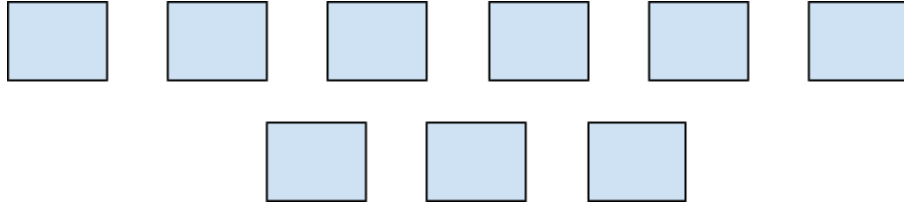


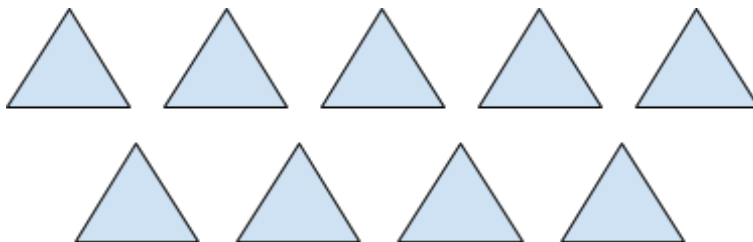


Write a math exercise



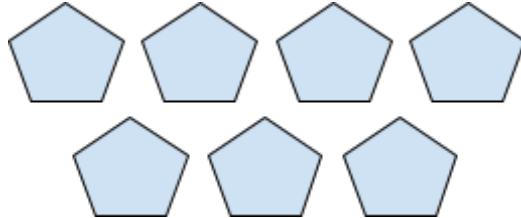
Write an addition exercise that describes the number of edges in the above image

Write a multiplication exercise that describes the number of edges in the above image



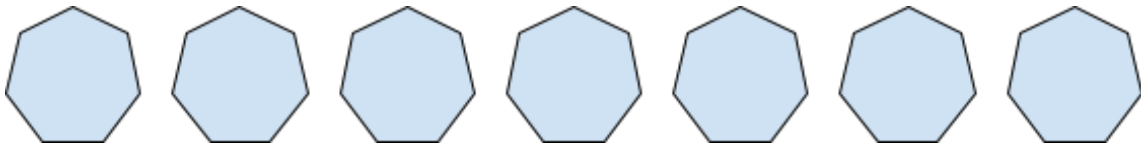
Write an addition exercise that describes the number of edges in the above image

Write a multiplication exercise that describes the number of edges in the above image



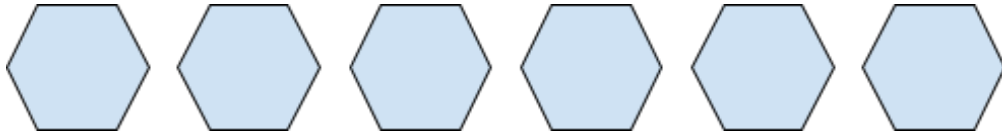
Write an addition exercise that describes the number of edges in the above image

Write a multiplication exercise that describes the number of edges in the above image



Write an addition exercise that describes the number of edges in the above image

Write a multiplication exercise that describes the number of edges in the above image



Write an addition exercise that describes the number of edges in the above image

Write a multiplication exercise that describes the number of edges in the above image



Write an addition exercise that describes the number of edges in the above image

Write a multiplication exercise that describes the number of edges in the above image
