

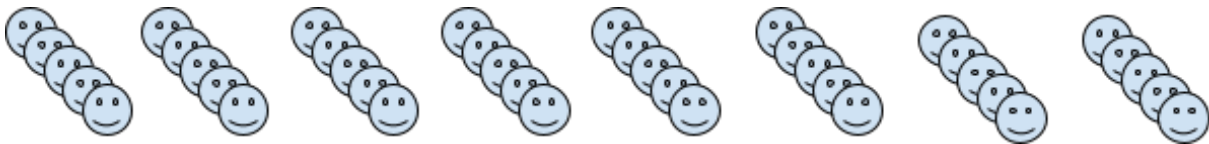


### Write a math exercise



Write an addition exercise the describes the number of balls in the above image \_\_\_\_\_

Write a multiplication exercise the describes the number of balls in the above image \_\_\_\_\_




Write an addition exercise the describes the number of faces in the above image \_\_\_\_\_

Write a multiplication exercise the describes the number of faces in the above image \_\_\_\_\_




Write an addition exercise the describes the number of clouds in the above image \_\_\_\_\_

Write a multiplication exercise the describes the number of clouds in the above image \_\_\_\_\_



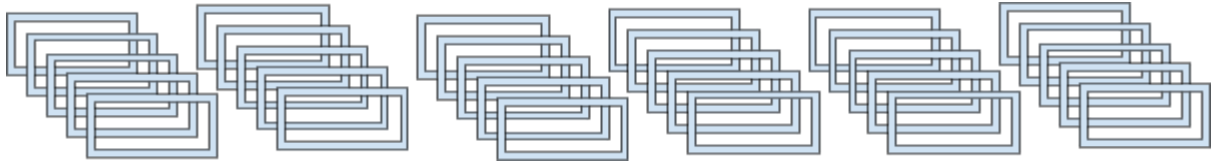
Write an addition exercise the describes the number of hearts in the above image \_\_\_\_\_

Write a multiplication exercise the describes the number of hearts in the above image \_\_\_\_\_



Write an addition exercise the describes the number of elements in the above image \_\_\_\_\_

Write a multiplication exercise the describes the number of elements in the above image \_\_\_\_\_



Write an addition exercise the describes the number of shapes in the above image \_\_\_\_\_

Write a multiplication exercise the describes the number of shapes in the above image \_\_\_\_\_



Write an addition exercise the describes the number of shapes in the above image \_\_\_\_\_

Write a multiplication exercise the describes the number of shapes in the above image \_\_\_\_\_