

Multiplication Table Practice

Write a Multiplication exercise that represent the number of boxes in each question




$$\square \times \square = \square$$



$$\square \times \square = \square$$




$$\square \times \square = \square$$




$$\square \times \square = \square$$



$$\square \times \square = \square$$



$$\square \times \square = \square$$



$$\square \times \square = \square$$



$$\square \times \square = \square$$



$$\square \times \square = \square$$



$$\square \times \square = \square$$




$$7 \times 4 = 28$$



$$4 \times 3 = 12$$




$$8 \times 4 = 32$$




$$8 \times 7 = 56$$



$$4 \times 5 = 20$$



$$8 \times 5 = 40$$



$$7 \times 6 = 42$$



$$5 \times 6 = 30$$



$$7 \times 2 = 14$$



$$8 \times 3 = 24$$