


Multiplication Table Practice

Write a Multiplication exercise that represent the number of boxes in each question



$$\square \times \square = \square$$




$$\square \times \square = \square$$



$$\square \times \square = \square$$



$$\square \times \square = \square$$



$$\square \times \square = \square$$



$$\square \times \square = \square$$



$$\square \times \square = \square$$




$$\square \times \square = \square$$



$$\square \times \square = \square$$



$$\square \times \square = \square$$



$$7 \times 6 = 42$$




$$2 \times 4 = 8$$



$$3 \times 2 = 6$$



$$4 \times 5 = 20$$



$$8 \times 5 = 40$$



$$2 \times 8 = 16$$



$$4 \times 7 = 28$$



$$8 \times 4 = 32$$



$$6 \times 3 = 18$$



$$6 \times 5 = 30$$