

Multiplication Table Practice


Write a Multiplication exercise that represent the number of boxes in each question



$$\square \times \square = \square$$



$$\square \times \square = \square$$




$$\square \times \square = \square$$



$$\square \times \square = \square$$



$$\square \times \square = \square$$




$$\square \times \square = \square$$



$$\square \times \square = \square$$



$$\square \times \square = \square$$



$$\square \times \square = \square$$



$$\square \times \square = \square$$



$$4 \times 5 = 20$$



$$8 \times 3 = 24$$




$$8 \times 6 = 48$$



$$4 \times 7 = 28$$



$$3 \times 4 = 12$$




$$8 \times 7 = 56$$



$$5 \times 7 = 35$$



$$3 \times 2 = 6$$



$$5 \times 6 = 30$$



$$2 \times 5 = 10$$