












## Multiplication Table Practice

Write a Multiplication exercise that represent the number of boxes in each question

 $\square \times \square = \square$  $\square \times \square = \square$  $\square \times \square = \square$  $\square \times \square = \square$  $\square \times \square = \square$  $\square \times \square = \square$  $\square \times \square = \square$  $\square \times \square = \square$  $\square \times \square = \square$  $\square \times \square = \square$



$$6 \times 5 = 30$$



$$5 \times 8 = 40$$



$$5 \times 4 = 20$$



$$6 \times 7 = 42$$



$$3 \times 5 = 15$$



$$3 \times 4 = 12$$



$$5 \times 7 = 35$$



$$6 \times 4 = 24$$



$$8 \times 6 = 48$$



$$4 \times 7 = 28$$