

Identifying Fraction

Color the boxes according to the fraction in each question


 $\frac{1}{4}$
 $\frac{4}{4}$

 $\frac{5}{6}$
 $\frac{6}{6}$

 $\frac{1}{3}$
 $\frac{3}{3}$

 $\frac{3}{5}$
 $\frac{5}{5}$

 $\frac{1}{2}$
 $\frac{2}{2}$

 $\frac{3}{5}$
 $\frac{5}{5}$

 $\frac{3}{4}$
 $\frac{4}{4}$


 $\frac{1}{3}$
 $\frac{3}{3}$

 $\frac{1}{4}$
 $\frac{4}{4}$

 $\frac{1}{4}$
 $\frac{4}{4}$

 $\frac{2}{6}$
 $\frac{6}{6}$

 $\frac{3}{8}$
 $\frac{8}{8}$


 $\frac{1}{2}$
 $\frac{2}{2}$

 $\frac{2}{7}$
 $\frac{7}{7}$


 $\frac{1}{4}$
 $\frac{4}{4}$

 $\frac{3}{6}$
 $\frac{6}{6}$

	$\frac{1}{4}$
---	---------------

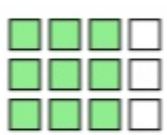
	$\frac{5}{6}$
--	---------------


	$\frac{1}{3}$
---	---------------

	$\frac{3}{5}$
--	---------------

	$\frac{1}{2}$
---	---------------

	$\frac{3}{5}$
--	---------------


	$\frac{3}{4}$
---	---------------

	$\frac{1}{3}$
--	---------------

	$\frac{1}{4}$
---	---------------

	$\frac{1}{4}$
--	---------------


	$\frac{2}{6}$
---	---------------

	$\frac{3}{8}$
--	---------------

	$\frac{1}{2}$
---	---------------

	$\frac{2}{7}$
--	---------------

	$\frac{1}{4}$
---	---------------

	$\frac{3}{6}$
--	---------------