

















## Identifying Fraction

Color the boxes according to the fraction in each question

|   |               |  |               |
|---|---------------|--|---------------|
|    | $\frac{2}{8}$ |    | $\frac{4}{7}$ |
|    | $\frac{2}{7}$ |    | $\frac{1}{4}$ |
|    | $\frac{1}{8}$ |    | $\frac{4}{5}$ |
|  | $\frac{3}{7}$ |  | $\frac{2}{7}$ |
|  | $\frac{3}{4}$ |  | $\frac{3}{4}$ |
|  | $\frac{3}{4}$ |  | $\frac{2}{3}$ |
|  | $\frac{1}{4}$ |  | $\frac{4}{7}$ |
|  | $\frac{3}{5}$ |  | $\frac{1}{6}$ |

|   |               |
|---|---------------|
|  | $\frac{2}{8}$ |
|---|---------------|

|  |               |
|--|---------------|
|  | $\frac{4}{7}$ |
|--|---------------|

|   |               |
|---|---------------|
|  | $\frac{2}{7}$ |
|---|---------------|

|  |               |
|--|---------------|
|  | $\frac{1}{4}$ |
|--|---------------|

|   |               |
|---|---------------|
|  | $\frac{1}{8}$ |
|---|---------------|

|  |               |
|--|---------------|
|  | $\frac{4}{5}$ |
|--|---------------|

|   |               |
|---|---------------|
|  | $\frac{3}{7}$ |
|---|---------------|

|  |               |
|--|---------------|
|  | $\frac{2}{7}$ |
|--|---------------|


|   |               |
|---|---------------|
|  | $\frac{3}{4}$ |
|---|---------------|

|  |               |
|--|---------------|
|  | $\frac{3}{4}$ |
|--|---------------|

|   |               |
|---|---------------|
|  | $\frac{3}{4}$ |
|---|---------------|

|  |               |
|--|---------------|
|  | $\frac{2}{3}$ |
|--|---------------|

|   |               |
|---|---------------|
|  | $\frac{1}{4}$ |
|---|---------------|

|  |               |
|--|---------------|
|  | $\frac{4}{7}$ |
|--|---------------|

|   |               |
|---|---------------|
|  | $\frac{3}{5}$ |
|---|---------------|

|  |               |
|--|---------------|
|  | $\frac{1}{6}$ |
|--|---------------|