



Circling fractions

Circle each group to represent each fraction


2
3



3
4


2
4


2
6



5
6


4
5


1
4


1
5


3
5



12 cakes
out of 18



3 cakes
out of 4



8 cakes
out of 16



8 cakes
out of 24



5 cakes
out of 6



4 cakes
out of 5



5 cakes
out of 20



3 cakes
out of 15



3 cakes
out of 5