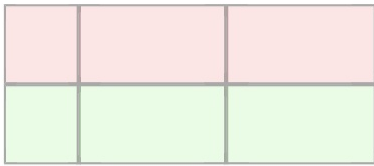
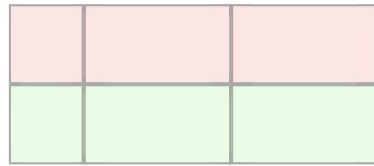
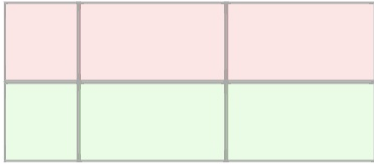


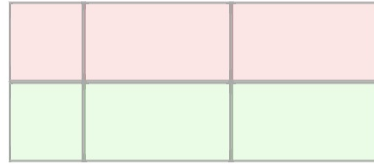
### Box Method Multiplication - 1Digit x 2Digit Practice

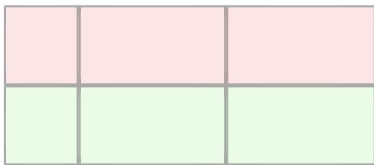
Use the box model to solve the following questions

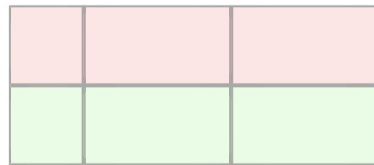
	$6 \times 21 = ?$
---	-------------------

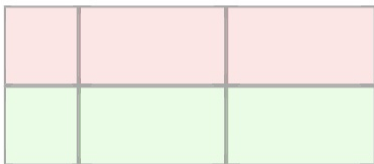
	$7 \times 87 = ?$
--	-------------------

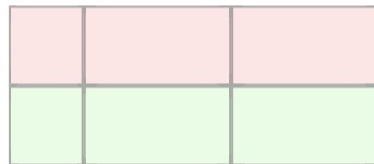
	$8 \times 62 = ?$
---	-------------------

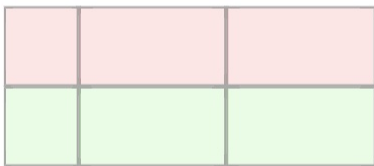
	$6 \times 49 = ?$
--	-------------------

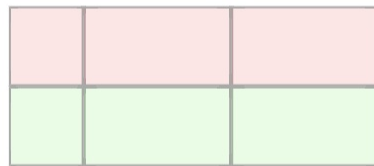
	$8 \times 23 = ?$
---	-------------------

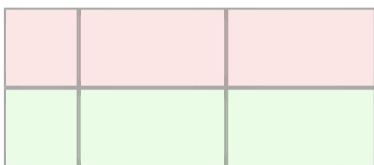
	$6 \times 10 = ?$
--	-------------------

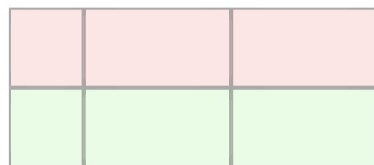
	$5 \times 51 = ?$
--	-------------------

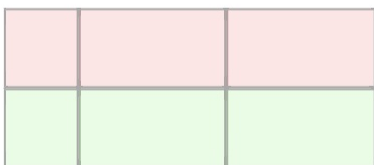
	$5 \times 67 = ?$
---	-------------------

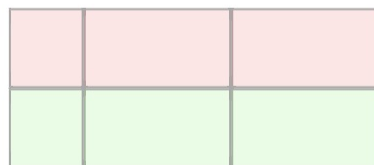
	$6 \times 33 = ?$
---	-------------------

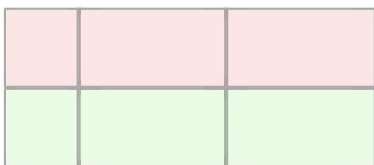
	$3 \times 36 = ?$
--	-------------------

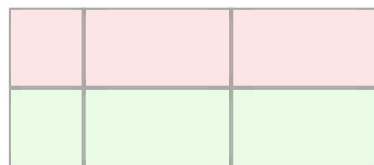
	$6 \times 66 = ?$
---	-------------------

	$3 \times 73 = ?$
--	-------------------

	$7 \times 43 = ?$
---	-------------------

	$8 \times 51 = ?$
--	-------------------

	$3 \times 36 = ?$
---	-------------------

	$7 \times 86 = ?$
--	-------------------

	20	1	$6 \times 21 = 126$
			+ 120
6	120	6	$\frac{6}{126}$

	80	7	$7 \times 87 = 609$
			+ 560
7	560	49	$\frac{49}{609}$

	60	2	$8 \times 62 = 496$
			+ 480
8	480	16	$\frac{16}{496}$

	40	9	$6 \times 49 = 294$
			+ 240
6	240	54	$\frac{54}{294}$

	20	3	$8 \times 23 = 184$
			+ 160
8	160	24	$\frac{24}{184}$

	10	0	$6 \times 10 = 60$
			+ 60
6	60	0	$\frac{0}{60}$

	50	1	$5 \times 51 = 255$
			+ 250
5	250	5	$\frac{5}{255}$

	60	7	$5 \times 67 = 335$
			+ 300
5	300	35	$\frac{35}{335}$

	30	3	$6 \times 33 = 198$
			+ 180
6	180	18	$\frac{18}{198}$

	30	6	$3 \times 36 = 108$
			+ 90
3	90	18	$\frac{18}{108}$

	60	6	$6 \times 66 = 396$
			+ 360
6	360	36	$\frac{36}{396}$

	70	3	$3 \times 73 = 219$
			+ 210
3	210	9	$\frac{9}{219}$

	40	3	$7 \times 43 = 301$
			+ 280
7	280	21	$\frac{21}{301}$

	50	1	$8 \times 51 = 408$
			+ 400
8	400	8	$\frac{8}{408}$

	30	6	$3 \times 36 = 108$
			+ 90
3	90	18	$\frac{18}{108}$

	80	6	$7 \times 86 = 602$
			+ 560
7	560	42	$\frac{42}{602}$